

Complete the activity in your notebooks

Name _____

Bass Clef Note Recognition

Name the space notes:

A musical staff with a bass clef. It contains a sequence of notes on the spaces of the staff: G, B, D, F, G, B, D, F, G, B, D, F, G, B, D, F. Below the staff is a dashed line for writing.

Name the line notes:

A musical staff with a bass clef. It contains a sequence of notes on the lines of the staff: F, A, C, E, G, B, D, F, A, C, E, G, B, D, F, A. Below the staff is a dashed line for writing.

Name both space/line notes:

A musical staff with a bass clef. It contains a sequence of notes alternating between spaces and lines: G, A, B, C, D, E, F, G, A, B, C, D, E, F, G, A. Below the staff is a dashed line for writing.

A musical staff with a bass clef. It contains a sequence of notes alternating between lines and spaces: F, G, A, B, C, D, E, F, G, A, B, C, D, E, F, G. Below the staff is a dashed line for writing.


A musical staff with a bass clef. It contains a sequence of notes alternating between spaces and lines: G, A, B, C, D, E, F, G, A, B, C, D, E, F, G, A. Below the staff is a dashed line for writing.


(THE LETTER NAME IS WHAT IS REQUIRED)


GIVE THE LETTER NAME OF EACH NOTE ON THE TREBLE STAFF.


Treble Clef # 1

Name: _____

1. 

2. 

3. 

4. 

Score: _____ Time: _____



Drawing Barlines

INSTRUCTIONS: Draw barlines in the right place on each line of music according to the time signature.



